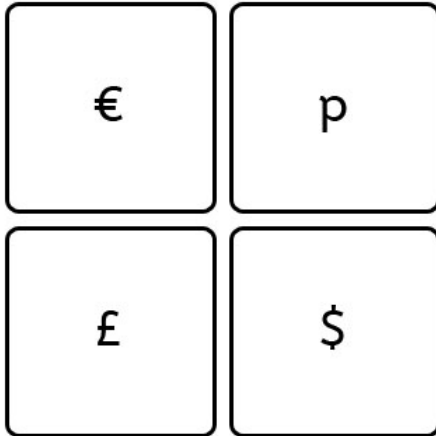




Tommy Tucker

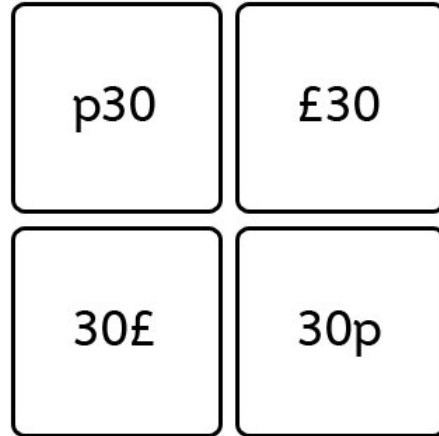
### Question 1

Which symbol is used for pounds?  
Tick the answer.



### Question 2

Which says thirty pence?  
Tick the answer.



### Question 3

Mia has 10p.  
How much more money does Mia need to buy the eggs?



### Question 4

How much money is there altogether?





Tommy Tucker


### Question 5

Tick two boxes that have the same amount of money.




### Question 6

Tick two boxes that have the same amount of money.



### Question 7

Draw the missing coin.



### Question 8

Tick two boxes that have the same amount of money.

